

BROJEVA 

1. Pisano zbroji:

$\begin{array}{r} 2156 \\ +2222 \\ \hline \end{array}$	$\begin{array}{r} 2543 \\ +5123 \\ \hline \end{array}$	$\begin{array}{r} 1444 \\ +5231 \\ \hline \end{array}$	$\begin{array}{r} 1121 \\ +2221 \\ \hline \end{array}$	$\begin{array}{r} 5328 \\ +2121 \\ \hline \end{array}$	$\begin{array}{r} 2333 \\ +1253 \\ \hline \end{array}$
--	--	--	--	--	--


$\begin{array}{r} 2156 \\ +2622 \\ \hline \end{array}$	$\begin{array}{r} 8522 \\ +3444 \\ \hline \end{array}$	$\begin{array}{r} 3251 \\ +5234 \\ \hline \end{array}$	$\begin{array}{r} 6152 \\ +2221 \\ \hline \end{array}$	$\begin{array}{r} 5222 \\ +1281 \\ \hline \end{array}$	$\begin{array}{r} 2295 \\ +1201 \\ \hline \end{array}$
--	--	--	--	--	--

$\begin{array}{r} 4187 \\ +5512 \\ \hline \end{array}$	$\begin{array}{r} 5471 \\ +5421 \\ \hline \end{array}$	$\begin{array}{r} 5551 \\ +2141 \\ \hline \end{array}$	$\begin{array}{r} 5471 \\ +2125 \\ \hline \end{array}$	$\begin{array}{r} 5541 \\ +5412 \\ \hline \end{array}$	$\begin{array}{r} 4511 \\ +4114 \\ \hline \end{array}$
--	--	--	--	--	--


$\begin{array}{r} 6621 \\ +2314 \\ \hline \end{array}$	$\begin{array}{r} 5511 \\ +2427 \\ \hline \end{array}$	$\begin{array}{r} 4531 \\ +1234 \\ \hline \end{array}$	$\begin{array}{r} 7252 \\ +4121 \\ \hline \end{array}$	$\begin{array}{r} 7161 \\ +8924 \\ \hline \end{array}$	$\begin{array}{r} 7453 \\ +1111 \\ \hline \end{array}$
--	--	--	--	--	--

$\begin{array}{r} 4532 \\ +5153 \\ \hline \end{array}$	$\begin{array}{r} 5473 \\ +3422 \\ \hline \end{array}$	$\begin{array}{r} 5554 \\ +2135 \\ \hline \end{array}$	$\begin{array}{r} 5428 \\ +2131 \\ \hline \end{array}$	$\begin{array}{r} 5548 \\ +5411 \\ \hline \end{array}$	$\begin{array}{r} 4583 \\ +4114 \\ \hline \end{array}$
--	--	--	--	--	--

2. U jednom vlaku nalazi se 267 ljudi. U vlak je u Zagrebu ušlo još 150 ljudi, a nitko nije izašao. Koliko je sada ljudi u tom vlaku?




3. Marko je ubrao 146 kg jabuka, a Krešo 122 kg. Koliko su kg jabuka ubrali zajedno ?



PISANO ZBRAJANJE I ODUZIMANJE ČETVEROZNAMENKASTIH 2
BROJEVA 

1. Mirko ima 800 kuna, a Marija 1 234 kune. Koliko kuna oni imaju zajedno?



2. Koji broj je za 1000 veći od 3 456 ?

3. Pisano zbroji :

$\begin{array}{r} 6\ 621 \\ +2\ 314 \\ \hline \end{array}$	$\begin{array}{r} 5\ 511 \\ +2\ 427 \\ \hline \end{array}$	$\begin{array}{r} 4\ 531 \\ +1\ 234 \\ \hline \end{array}$	$\begin{array}{r} 7\ 252 \\ +4\ 121 \\ \hline \end{array}$	$\begin{array}{r} 7\ 161 \\ +8\ 924 \\ \hline \end{array}$	$\begin{array}{r} 7\ 453 \\ +1\ 111 \\ \hline \end{array}$
--	--	--	--	--	--


$\begin{array}{r} 4\ 532 \\ +5\ 153 \\ \hline \end{array}$	$\begin{array}{r} 5\ 473 \\ +3\ 422 \\ \hline \end{array}$	$\begin{array}{r} 5\ 554 \\ +2\ 135 \\ \hline \end{array}$	$\begin{array}{r} 5\ 428 \\ +2\ 131 \\ \hline \end{array}$	$\begin{array}{r} 5\ 548 \\ +5\ 411 \\ \hline \end{array}$	$\begin{array}{r} 4\ 583 \\ +4\ 114 \\ \hline \end{array}$
--	--	--	--	--	--

$\begin{array}{r} 6\ 125 \\ +3\ 614 \\ \hline \end{array}$	$\begin{array}{r} 5\ 513 \\ +3\ 424 \\ \hline \end{array}$	$\begin{array}{r} 4\ 334 \\ +1\ 224 \\ \hline \end{array}$	$\begin{array}{r} 7\ 254 \\ +2\ 132 \\ \hline \end{array}$	$\begin{array}{r} 3\ 554 \\ +2\ 342 \\ \hline \end{array}$	$\begin{array}{r} 3\ 453 \\ +4\ 111 \\ \hline \end{array}$
--	--	--	--	--	--

$\begin{array}{r} 4156 \\ +2222 \\ \hline \end{array}$	$\begin{array}{r} 1\ 543 \\ +5\ 123 \\ \hline \end{array}$	$\begin{array}{r} 1\ 445 \\ +5\ 231 \\ \hline \end{array}$	$\begin{array}{r} 1\ 127 \\ +2\ 221 \\ \hline \end{array}$	$\begin{array}{r} 4\ 358 \\ +2\ 121 \\ \hline \end{array}$	$\begin{array}{r} 2\ 335 \\ +3\ 253 \\ \hline \end{array}$
--	--	--	--	--	--

$\begin{array}{r} 3\ 156 \\ +3\ 622 \\ \hline \end{array}$	$\begin{array}{r} 4\ 522 \\ +3\ 444 \\ \hline \end{array}$	$\begin{array}{r} 2\ 251 \\ +5\ 234 \\ \hline \end{array}$	$\begin{array}{r} 5\ 152 \\ +2\ 221 \\ \hline \end{array}$	$\begin{array}{r} 5\ 225 \\ +1\ 281 \\ \hline \end{array}$	$\begin{array}{r} 2\ 293 \\ +1\ 201 \\ \hline \end{array}$
--	--	--	--	--	--

PISANO ZBRAJANJE I ODUZIMANJE ČETVEROZNAMENKASTIH BROJEVA



1. Pisano zbroji sljedeće brojeve:

1 185 <u>+6 512</u>	5 471 <u>+3 424</u>	5 551 <u>+2 145</u>	5 453 <u>+2 125</u>	5 541 <u>+5 452</u>	4 541 <u>+4 114</u>
------------------------	------------------------	------------------------	------------------------	------------------------	------------------------

6 624 <u>+2 314</u>	5 513 <u>+2 422</u>	4 535 <u>+ 1 234</u>	7 255 <u>+2 521</u>	7 165 <u>+ 8 924</u>	7 453 <u>+2 117</u>
------------------------	------------------------	-------------------------	------------------------	-------------------------	------------------------

4 544 <u>+5 153</u>	5 473 <u>+3 434</u>	5 554 <u>+2 133</u>	5 425 <u>+2 122</u>	2 548 <u>+5 420</u>	2 583 <u>+4 105</u>
------------------------	------------------------	------------------------	------------------------	------------------------	------------------------

6 125 <u>+2 620</u>	4 513 <u>+ 5 424</u>	4 320 <u>+ 4 224</u>	3 233 <u>+ 2 132</u>	4 522 <u>+ 2 342</u>	5 453 <u>+4 122</u>
------------------------	-------------------------	-------------------------	-------------------------	-------------------------	------------------------

6 621 <u>+2 315</u>	5 524 <u>+ 2 435</u>	4 531 <u>+ 5 234</u>	7 200 <u>+4 185</u>	7 512 <u>+ 8 373</u>	5 432 <u>+1 312</u>
------------------------	-------------------------	-------------------------	------------------------	-------------------------	------------------------

2. Od škole do pošte ima 1 234 m, a od pošte do trgovine 2 342 m. Koliko metara ima od škole do trgovine?



3. Koji broj je za 10 veći od zadanih brojeva?

2 330 _____ 3 450 _____ 3 555 _____

BROJEVA 

1. Pisano zbroji brojeve:

$\begin{array}{r} 3\ 156 \\ +2\ 625 \\ \hline \end{array}$	$\begin{array}{r} 3\ 522 \\ +5\ 448 \\ \hline \end{array}$	$\begin{array}{r} 4\ 251 \\ +5\ 239 \\ \hline \end{array}$	$\begin{array}{r} 7\ 152 \\ +2\ 228 \\ \hline \end{array}$	$\begin{array}{r} 4\ 229 \\ +1\ 281 \\ \hline \end{array}$	$\begin{array}{r} 3\ 295 \\ +1\ 205 \\ \hline \end{array}$
--	--	--	--	--	--

$\begin{array}{r} 3\ 857 \\ +4\ 455 \\ \hline \end{array}$	$\begin{array}{r} 4\ 854 \\ +1\ 621 \\ \hline \end{array}$	$\begin{array}{r} 5\ 483 \\ +4\ 511 \\ \hline \end{array}$	$\begin{array}{r} 3\ 525 \\ +4\ 112 \\ \hline \end{array}$	$\begin{array}{r} 2\ 214 \\ +3\ 332 \\ \hline \end{array}$	$\begin{array}{r} 5\ 542 \\ +1\ 253 \\ \hline \end{array}$
--	--	--	--	--	--


$\begin{array}{r} 4\ 187 \\ +5\ 513 \\ \hline \end{array}$	$\begin{array}{r} 5\ 479 \\ +5\ 421 \\ \hline \end{array}$	$\begin{array}{r} 5\ 559 \\ +2\ 151 \\ \hline \end{array}$	$\begin{array}{r} 5\ 476 \\ +2\ 145 \\ \hline \end{array}$	$\begin{array}{r} 5\ 549 \\ +5\ 412 \\ \hline \end{array}$	$\begin{array}{r} 4\ 517 \\ +4\ 114 \\ \hline \end{array}$
--	--	--	--	--	--

$\begin{array}{r} 6\ 626 \\ +2\ 314 \\ \hline \end{array}$	$\begin{array}{r} 5\ 515 \\ +2\ 427 \\ \hline \end{array}$	$\begin{array}{r} 4\ 536 \\ +1\ 234 \\ \hline \end{array}$	$\begin{array}{r} 7\ 252 \\ +4\ 189 \\ \hline \end{array}$	$\begin{array}{r} 7\ 161 \\ +8\ 929 \\ \hline \end{array}$	$\begin{array}{r} 7\ 453 \\ +1\ 118 \\ \hline \end{array}$
--	--	--	--	--	--

2. U Bjelovarsko - bilogorskoj županiji ima 4 320 traktora, a u Brodsko – posavskoj županiji 3 227 traktora. Koliko ukupno traktora ima u te dvije županije?



3. Tijekom mjeseca rujna na jednoj tržnici prodano je 2 345 kg jabuka i 4 556 kg šljiva. Koliko je ukupno kg jabuka i šljiva prodano na toj tržnici u rujnu?



BROJEVA 

1. Pisano zbroji:

$\begin{array}{r} 4\ 532 \\ +5\ 158 \\ \hline \end{array}$	$\begin{array}{r} 5\ 478 \\ +5\ 477 \\ \hline \end{array}$	$\begin{array}{r} 5\ 558 \\ +2\ 155 \\ \hline \end{array}$	$\begin{array}{r} 5\ 478 \\ +2\ 145 \\ \hline \end{array}$	$\begin{array}{r} 5\ 548 \\ +5\ 419 \\ \hline \end{array}$	$\begin{array}{r} 4\ 589 \\ +4\ 114 \\ \hline \end{array}$
--	--	--	--	--	--

$\begin{array}{r} 6\ 125 \\ +4\ 617 \\ \hline \end{array}$	$\begin{array}{r} 5\ 513 \\ +3\ 428 \\ \hline \end{array}$	$\begin{array}{r} 4\ 334 \\ +1\ 229 \\ \hline \end{array}$	$\begin{array}{r} 7\ 254 \\ +2\ 138 \\ \hline \end{array}$	$\begin{array}{r} 3\ 554 \\ +2\ 349 \\ \hline \end{array}$	$\begin{array}{r} 3\ 453 \\ +4\ 117 \\ \hline \end{array}$
--	--	--	--	--	--

$\begin{array}{r} 6\ 626 \\ +1\ 316 \\ \hline \end{array}$	$\begin{array}{r} 5\ 585 \\ +2\ 457 \\ \hline \end{array}$	$\begin{array}{r} 4\ 539 \\ +1\ 234 \\ \hline \end{array}$	$\begin{array}{r} 7\ 859 \\ +4\ 182 \\ \hline \end{array}$	$\begin{array}{r} 6\ 568 \\ +8\ 423 \\ \hline \end{array}$	$\begin{array}{r} 5\ 453 \\ +1\ 119 \\ \hline \end{array}$
--	--	--	--	--	--

$\begin{array}{r} 6\ 621 \\ +2\ 014 \\ \hline \end{array}$	$\begin{array}{r} 5\ 539 \\ +1\ 417 \\ \hline \end{array}$	$\begin{array}{r} 3\ 537 \\ +5\ 234 \\ \hline \end{array}$	$\begin{array}{r} 7\ 259 \\ +2\ 129 \\ \hline \end{array}$	$\begin{array}{r} 7\ 568 \\ +1\ 927 \\ \hline \end{array}$	$\begin{array}{r} 5\ 458 \\ +6\ 716 \\ \hline \end{array}$
--	--	--	--	--	--

2. Jedan trkač pretrčao je 2 678 m, a drugi trkač 1 345 m više. Koliko metara su pretrčali ukupno ta dva trkača?



3. Koji broj je za 2 345 veći od 4 562?

4. U jednoj košari je 1 456 oraha, a u drugoj 45 oraha više. Koliko oraha ima u objema košarama?



BROJEVA 

1. Pisano zbroji:

$$\begin{array}{r} 3\ 156 \\ +9\ 625 \\ \hline \end{array}$$

$$\begin{array}{r} 3\ 522 \\ +8\ 448 \\ \hline \end{array}$$

$$\begin{array}{r} 7\ 251 \\ +5\ 239 \\ \hline \end{array}$$

$$\begin{array}{r} 7\ 152 \\ +8\ 228 \\ \hline \end{array}$$

$$\begin{array}{r} 4\ 289 \\ +1\ 281 \\ \hline \end{array}$$

$$\begin{array}{r} 3\ 295 \\ +9\ 205 \\ \hline \end{array}$$

$$\begin{array}{r} 3\ 857 \\ +4\ 485 \\ \hline \end{array}$$

$$\begin{array}{r} 4\ 854 \\ +1\ 671 \\ \hline \end{array}$$

$$\begin{array}{r} 5\ 483 \\ +4\ 561 \\ \hline \end{array}$$

$$\begin{array}{r} 3\ 525 \\ +4\ 152 \\ \hline \end{array}$$

$$\begin{array}{r} 2\ 214 \\ +3\ 392 \\ \hline \end{array}$$

$$\begin{array}{r} 5\ 542 \\ +1\ 293 \\ \hline \end{array}$$

$$\begin{array}{r} 4\ 187 \\ +5\ 583 \\ \hline \end{array}$$

$$\begin{array}{r} 5\ 479 \\ +5\ 471 \\ \hline \end{array}$$

$$\begin{array}{r} 5\ 559 \\ +2\ 161 \\ \hline \end{array}$$

$$\begin{array}{r} 5\ 476 \\ +7\ 145 \\ \hline \end{array}$$

$$\begin{array}{r} 5\ 549 \\ +9\ 492 \\ \hline \end{array}$$

$$\begin{array}{r} 4\ 517 \\ +4\ 194 \\ \hline \end{array}$$

$$\begin{array}{r} 6\ 626 \\ +2\ 374 \\ \hline \end{array}$$

$$\begin{array}{r} 5\ 515 \\ +2\ 497 \\ \hline \end{array}$$

$$\begin{array}{r} 4\ 536 \\ +1\ 284 \\ \hline \end{array}$$

$$\begin{array}{r} 7\ 251 \\ +2\ 189 \\ \hline \end{array}$$

$$\begin{array}{r} 7\ 161 \\ +2\ 929 \\ \hline \end{array}$$

$$\begin{array}{r} 7\ 459 \\ +1\ 168 \\ \hline \end{array}$$

$$\begin{array}{r} 4\ 537 \\ +5\ 168 \\ \hline \end{array}$$

$$\begin{array}{r} 5\ 478 \\ +7\ 497 \\ \hline \end{array}$$

$$\begin{array}{r} 5\ 558 \\ +6\ 155 \\ \hline \end{array}$$

$$\begin{array}{r} 5\ 478 \\ +2\ 175 \\ \hline \end{array}$$

$$\begin{array}{r} 5\ 548 \\ +5\ 499 \\ \hline \end{array}$$

$$\begin{array}{r} 4\ 589 \\ +9\ 184 \\ \hline \end{array}$$

2. U jednom jatu ima 3 456 ptica, a u drugom 4 367 ptica. Koliko ukupno ptica ima u oba jata?



3. Na crte upiši broj za jedan veći od zadanoga broja:

$$2\ 345 \quad \underline{\hspace{2cm}} \quad 1\ 234 \quad \underline{\hspace{2cm}} \quad 6\ 777 \quad \underline{\hspace{2cm}}$$

$$1\ 200 \quad \underline{\hspace{2cm}} \quad 1\ 390 \quad \underline{\hspace{2cm}} \quad 5\ 999 \quad \underline{\hspace{2cm}}$$

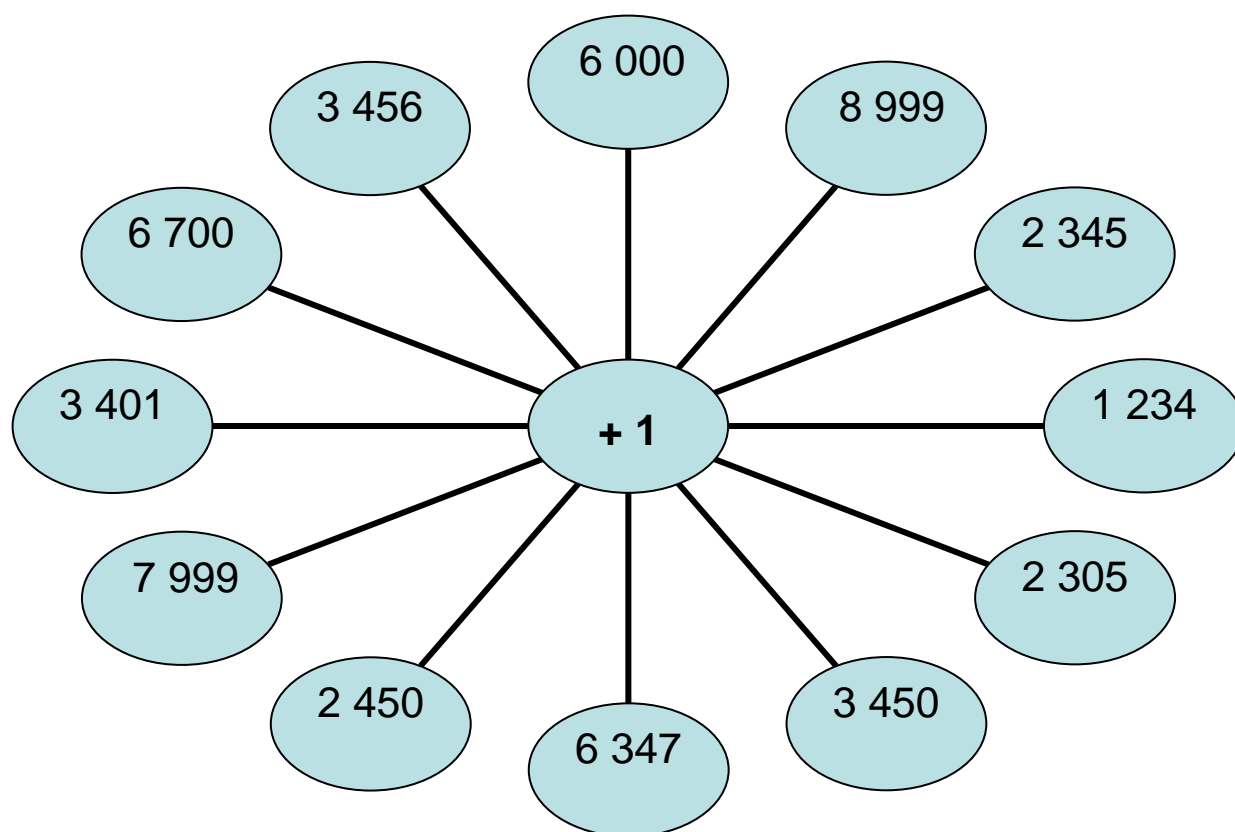
BROJEVA 

$4\ 537$	$5\ 478$	$5\ 558$	$5\ 478$	$5\ 548$	$4\ 589$
<u>$+5\ 168$</u>	<u>$+7\ 407$</u>	<u>$+6\ 105$</u>	<u>$+2\ 145$</u>	<u>$+5\ 499$</u>	<u>$+9\ 184$</u>

$7\ 125$	$5\ 513$	$4\ 334$	$7\ 254$	$3\ 554$	$3\ 453$
<u>$+3\ 687$</u>	<u>$+3\ 498$</u>	<u>$+1\ 289$</u>	<u>$+2\ 158$</u>	<u>$+9\ 389$</u>	<u>$+6\ 197$</u>

$6\ 626$	$4\ 585$	$5\ 539$	$8\ 259$	$7\ 568$	$5\ 453$
<u>$+6\ 399$</u>	<u>$+2\ 478$</u>	<u>$+8\ 284$</u>	<u>$+4\ 177$</u>	<u>$+8\ 463$</u>	<u>$+2\ 919$</u>

$6\ 721$	$5\ 539$	$4\ 537$	$7\ 259$	$7\ 568$	$5\ 458$
<u>$+2\ 314$</u>	<u>$+2\ 717$</u>	<u>$+5\ 284$</u>	<u>$+8\ 129$</u>	<u>$+1\ 927$</u>	<u>$+6\ 796$</u>



Ispod svakoga broja napiši broj koji je za 1 veći od zadanoga broja.

BROJEVA 

1. Pisano zbroji:

$$\begin{array}{r} 3\ 156 \\ +4\ 625 \\ \hline \end{array} \quad \begin{array}{r} 3\ 533 \\ +8\ 448 \\ \hline \end{array} \quad \begin{array}{r} 7\ 233 \\ +5\ 239 \\ \hline \end{array} \quad \begin{array}{r} 7\ 155 \\ +8\ 228 \\ \hline \end{array} \quad \begin{array}{r} 4\ 233 \\ +1\ 281 \\ \hline \end{array} \quad \begin{array}{r} 3\ 266 \\ +9\ 205 \\ \hline \end{array}$$

$$\begin{array}{r} 7\ 857 \\ +4\ 485 \\ \hline \end{array} \quad \begin{array}{r} 4\ 854 \\ +7\ 671 \\ \hline \end{array} \quad \begin{array}{r} 5\ 445 \\ +4\ 561 \\ \hline \end{array} \quad \begin{array}{r} 3\ 566 \\ +4\ 152 \\ \hline \end{array} \quad \begin{array}{r} 2\ 233 \\ +3\ 392 \\ \hline \end{array} \quad \begin{array}{r} 5\ 555 \\ +1\ 293 \\ \hline \end{array}$$

$$\begin{array}{r} 4\ 144 \\ +5\ 563 \\ \hline \end{array} \quad \begin{array}{r} 5\ 455 \\ +5\ 371 \\ \hline \end{array} \quad \begin{array}{r} 5\ 577 \\ +4\ 161 \\ \hline \end{array} \quad \begin{array}{r} 5\ 488 \\ +9\ 145 \\ \hline \end{array} \quad \begin{array}{r} 5\ 577 \\ +6\ 492 \\ \hline \end{array} \quad \begin{array}{r} 4\ 887 \\ +7\ 191 \\ \hline \end{array}$$

$$\begin{array}{r} 6\ 647 \\ +2\ 374 \\ \hline \end{array} \quad \begin{array}{r} 5\ 467 \\ +2\ 497 \\ \hline \end{array} \quad \begin{array}{r} 4\ 567 \\ +1\ 284 \\ \hline \end{array} \quad \begin{array}{r} 7\ 266 \\ +2\ 189 \\ \hline \end{array} \quad \begin{array}{r} 7\ 169 \\ +2\ 929 \\ \hline \end{array} \quad \begin{array}{r} 7\ 466 \\ +1\ 168 \\ \hline \end{array}$$

$$\begin{array}{r} 8\ 667 \\ +5\ 168 \\ \hline \end{array} \quad \begin{array}{r} 7\ 478 \\ +7\ 407 \\ \hline \end{array} \quad \begin{array}{r} 8\ 566 \\ +6\ 155 \\ \hline \end{array} \quad \begin{array}{r} 5\ 499 \\ +2\ 175 \\ \hline \end{array} \quad \begin{array}{r} 5\ 545 \\ +5\ 499 \\ \hline \end{array} \quad \begin{array}{r} 4\ 577 \\ +9\ 184 \\ \hline \end{array}$$

2. Izračunaj:

PRIBROJNIK	2 345	1 230	2 345	6 545	2 333	1 233	6 789
PRIBROJNIK	2 224	1 234	6 789	1 345	5 677	1 277	3 430
ZBROJ							

PRIBROJNIK	7 344	7 230	2 340	6 533	7 311	4 233	6 744
PRIBROJNIK	2 233	1 239	8 709	3 345	3 277	1 281	2 430
ZBROJ							

PISANO ZBRAJANJE I ODUZIMANJE ČETVEROZNAMENKASTIH
BROJEVA 

9

1. Pisano oduzmi:

C

$$\begin{array}{r} 2\ 556 \\ -1\ 222 \\ \hline \end{array} \quad \begin{array}{r} 2\ 543 \\ -1\ 123 \\ \hline \end{array} \quad \begin{array}{r} 7\ 444 \\ -5\ 231 \\ \hline \end{array} \quad \begin{array}{r} 6\ 121 \\ -2\ 221 \\ \hline \end{array} \quad \begin{array}{r} 5\ 328 \\ -2\ 121 \\ \hline \end{array} \quad \begin{array}{r} 2\ 333 \\ -1\ 223 \\ \hline \end{array}$$

$$\begin{array}{r} 8\ 856 \\ -2\ 622 \\ \hline \end{array} \quad \begin{array}{r} 8\ 566 \\ -3\ 444 \\ \hline \end{array} \quad \begin{array}{r} 3\ 251 \\ -2\ 230 \\ \hline \end{array} \quad \begin{array}{r} 6\ 152 \\ -2\ 221 \\ \hline \end{array} \quad \begin{array}{r} 5\ 222 \\ -1\ 211 \\ \hline \end{array} \quad \begin{array}{r} 2\ 295 \\ -1\ 201 \\ \hline \end{array}$$

$$\begin{array}{r} 4\ 857 \\ -4\ 122 \\ \hline \end{array} \quad \begin{array}{r} 7\ 854 \\ -1\ 121 \\ \hline \end{array} \quad \begin{array}{r} 9\ 483 \\ -4\ 311 \\ \hline \end{array} \quad \begin{array}{r} 5\ 525 \\ -4\ 112 \\ \hline \end{array} \quad \begin{array}{r} 3\ 494 \\ -1\ 332 \\ \hline \end{array} \quad \begin{array}{r} 4\ 588 \\ -1\ 253 \\ \hline \end{array}$$

$$\begin{array}{r} 9\ 687 \\ -5\ 512 \\ \hline \end{array} \quad \begin{array}{r} 5\ 477 \\ -5\ 421 \\ \hline \end{array} \quad \begin{array}{r} 5\ 551 \\ -2\ 141 \\ \hline \end{array} \quad \begin{array}{r} 5\ 479 \\ -2\ 125 \\ \hline \end{array} \quad \begin{array}{r} 5\ 549 \\ -5\ 412 \\ \hline \end{array} \quad \begin{array}{r} 4\ 888 \\ -3\ 114 \\ \hline \end{array}$$

$$\begin{array}{r} 6\ 655 \\ -2\ 314 \\ \hline \end{array} \quad \begin{array}{r} 5\ 599 \\ -2\ 427 \\ \hline \end{array} \quad \begin{array}{r} 4\ 531 \\ -1\ 234 \\ \hline \end{array} \quad \begin{array}{r} 7\ 252 \\ -4\ 121 \\ \hline \end{array} \quad \begin{array}{r} 7\ 888 \\ -8\ 924 \\ \hline \end{array} \quad \begin{array}{r} 7\ 453 \\ -1\ 111 \\ \hline \end{array}$$

2. U Zagrebu živi 85 728 umirovljenika, a u Osijeku 3 214 manje nego u Zagrebu. Koliko umirovljenika živi u Osijeku?

3. U tvornici cipela proizvedeno je prošle godine 84 567 pari cipela, a ove godine 12 345 pari cipela manje nego prošle godine. Koliko je pari cipela proizvedeno ove godine?



4. Koji broj je za 3 456 manji od 9 998?

BROJEVA 

1. Pisano oduzmi:

C

$$\begin{array}{r} 8\ 532 \\ - 5\ 103 \\ \hline \end{array} \quad \begin{array}{r} 5\ 473 \\ - 3\ 422 \\ \hline \end{array} \quad \begin{array}{r} 5\ 554 \\ - 2\ 135 \\ \hline \end{array} \quad \begin{array}{r} 5\ 498 \\ - 2\ 131 \\ \hline \end{array} \quad \begin{array}{r} 5\ 548 \\ - 5\ 411 \\ \hline \end{array} \quad \begin{array}{r} 4\ 583 \\ - 4\ 114 \\ \hline \end{array}$$

$$\begin{array}{r} 6\ 925 \\ - 3\ 614 \\ \hline \end{array} \quad \begin{array}{r} 5\ 513 \\ - 3\ 424 \\ \hline \end{array} \quad \begin{array}{r} 4\ 334 \\ - 1\ 224 \\ \hline \end{array} \quad \begin{array}{r} 7\ 254 \\ - 2\ 132 \\ \hline \end{array} \quad \begin{array}{r} 3\ 554 \\ - 2\ 342 \\ \hline \end{array} \quad \begin{array}{r} 3\ 453 \\ - 4\ 111 \\ \hline \end{array}$$

$$\begin{array}{r} 6\ 629 \\ - 2\ 314 \\ \hline \end{array} \quad \begin{array}{r} 5\ 594 \\ - 2\ 433 \\ \hline \end{array} \quad \begin{array}{r} 4\ 539 \\ - 1\ 234 \\ \hline \end{array} \quad \begin{array}{r} 7\ 299 \\ - 4\ 189 \\ \hline \end{array} \quad \begin{array}{r} 7\ 588 \\ - 8\ 374 \\ \hline \end{array} \quad \begin{array}{r} 5\ 439 \\ - 1\ 116 \\ \hline \end{array}$$

2. Marko je uštedio 2 456 kn, a Ivan 3 432 kune manje nego Marko. Koliko kn je uštedio Ivan?



3. Izračunaj razliku brojeva 234 677 i 121 112.

4. Izračunaj:

UMANJENIK	6 345	8 239	9 345	6 545	7 899	9 233	6 789
UMANJITELJ	1 224	1 234	6 111	1 211	5 677	1 222	2 430
RAZLIKA							

UMANJENIK	7 344	7 230	5 222	6 589	7 366	4 289	6 767
UMANJITELJ	2 233	1 230	4 211	3 345	3 232	1 281	2 430
RAZLIKA							

BROJEVA 

1. Pisano oduzmi:

C

$$\begin{array}{r} 2\ 577 \\ - 2\ 222 \\ \hline \end{array} \quad \begin{array}{r} 9\ 543 \\ - 1\ 123 \\ \hline \end{array} \quad \begin{array}{r} 7\ 888 \\ - 3\ 231 \\ \hline \end{array} \quad \begin{array}{r} 6\ 555 \\ - 2\ 221 \\ \hline \end{array} \quad \begin{array}{r} 5\ 789 \\ - 2\ 121 \\ \hline \end{array} \quad \begin{array}{r} 2\ 388 \\ - 1\ 223 \\ \hline \end{array}$$

$$\begin{array}{r} 2\ 844 \\ - 2\ 622 \\ \hline \end{array} \quad \begin{array}{r} 6\ 766 \\ - 3\ 444 \\ \hline \end{array} \quad \begin{array}{r} 3\ 288 \\ - 2\ 230 \\ \hline \end{array} \quad \begin{array}{r} 6\ 189 \\ - 2\ 221 \\ \hline \end{array} \quad \begin{array}{r} 5\ 285 \\ - 1\ 211 \\ \hline \end{array} \quad \begin{array}{r} 2\ 995 \\ - 1\ 255 \\ \hline \end{array}$$

$$\begin{array}{r} 4\ 857 \\ - 4\ 222 \\ \hline \end{array} \quad \begin{array}{r} 7\ 854 \\ - 1\ 542 \\ \hline \end{array} \quad \begin{array}{r} 9\ 847 \\ - 4\ 311 \\ \hline \end{array} \quad \begin{array}{r} 5\ 588 \\ - 4\ 112 \\ \hline \end{array} \quad \begin{array}{r} 3\ 485 \\ - 1\ 332 \\ \hline \end{array} \quad \begin{array}{r} 9\ 595 \\ - 1\ 253 \\ \hline \end{array}$$

$$\begin{array}{r} 9\ 687 \\ - 5\ 534 \\ \hline \end{array} \quad \begin{array}{r} 5\ 466 \\ - 5\ 421 \\ \hline \end{array} \quad \begin{array}{r} 5\ 574 \\ - 2\ 141 \\ \hline \end{array} \quad \begin{array}{r} 5\ 499 \\ - 2\ 125 \\ \hline \end{array} \quad \begin{array}{r} 5\ 566 \\ - 4\ 412 \\ \hline \end{array} \quad \begin{array}{r} 4\ 875 \\ - 3\ 114 \\ \hline \end{array}$$

$$\begin{array}{r} 6\ 885 \\ - 2\ 314 \\ \hline \end{array} \quad \begin{array}{r} 5\ 588 \\ - 4\ 422 \\ \hline \end{array} \quad \begin{array}{r} 4\ 545 \\ - 1\ 234 \\ \hline \end{array} \quad \begin{array}{r} 7\ 255 \\ - 4\ 125 \\ \hline \end{array} \quad \begin{array}{r} 9\ 865 \\ - 8\ 924 \\ \hline \end{array} \quad \begin{array}{r} 7\ 489 \\ - 1\ 111 \\ \hline \end{array}$$

2. U trgovinu je stiglo 2 345 kuglica za ukrašavanje borova. Od toga je 1500 zlatnih, a ostale su srebrne. Koliko je srebrnih kuglica stiglo u trgovinu?



3. Od broja 2 678 oduzmi broj 345.

BROJEVA 

1. Pisano oduzmi: C

2 840	5 760	3 280	6 180	5 280	2 990
<u>- 1 622</u>	<u>- 3 444</u>	<u>- 1 230</u>	<u>- 2 221</u>	<u>- 1 211</u>	<u>- 1 255</u>

4 850	7 850	9 840	5 580	3 480	4 590
<u>- 3 222</u>	<u>- 1 542</u>	<u>- 4 311</u>	<u>- 4 112</u>	<u>- 1 332</u>	<u>- 1 233</u>

9 681	4 460	3 570	5 492	5 562	4 873
<u>- 2 534</u>	<u>- 2 421</u>	<u>- 2 141</u>	<u>- 2 125</u>	<u>- 5 412</u>	<u>- 3 114</u>

7 885	5 582	4 541	7 251	7 863	7 485
<u>- 2 417</u>	<u>- 3 427</u>	<u>- 1 234</u>	<u>- 4 121</u>	<u>- 8 924</u>	<u>- 1 116</u>

2. U rasadniku su za božićne blagdane uzgojili 3 456 jela.
Prodano je 2 189. Koliko je jela ostalo u rasadniku?



3. Sveti Nikola je u Zagrebu podijelio 4 567 darova djeci, a u Samoboru 1 234 dara. Koliko je ukupno darova podijelio sveti Nikola?



BROJEVA 

1. Pisano oduzmi:

C

$4\ 580$	$5\ 452$	$5\ 572$	$5\ 442$	$5\ 580$	$4\ 553$
$- 3\ 103$	$- 3\ 422$	$- 2\ 135$	$- 2\ 131$	$- 5\ 411$	$- 4\ 114$

$3\ 770$	$5\ 562$	$4\ 385$	$7\ 288$	$3\ 579$	$3\ 453$
$- 1\ 614$	$- 4\ 424$	$- 1\ 224$	$- 2\ 132$	$- 2\ 342$	$- 4\ 122$


$6\ 643$	$5\ 582$	$4\ 553$	$7\ 241$	$7\ 591$	$8\ 491$
$- 4\ 334$	$- 4\ 423$	$- 2\ 234$	$- 3\ 122$	$- 3\ 374$	$- 4\ 116$

2. U hotelu ima mjesta za 2 345 gostiju. Trenutačno u hotelu boravi 1 456 gostiju. Koliko je još slobodnih mjesta u hotelu?

3. U trgovinama je počela rasprodaja. Trosjed, koji je stajao 4 567 kn, sada stoji 2 985 kn. Koliko je kuna trosjed sada povoljniji?

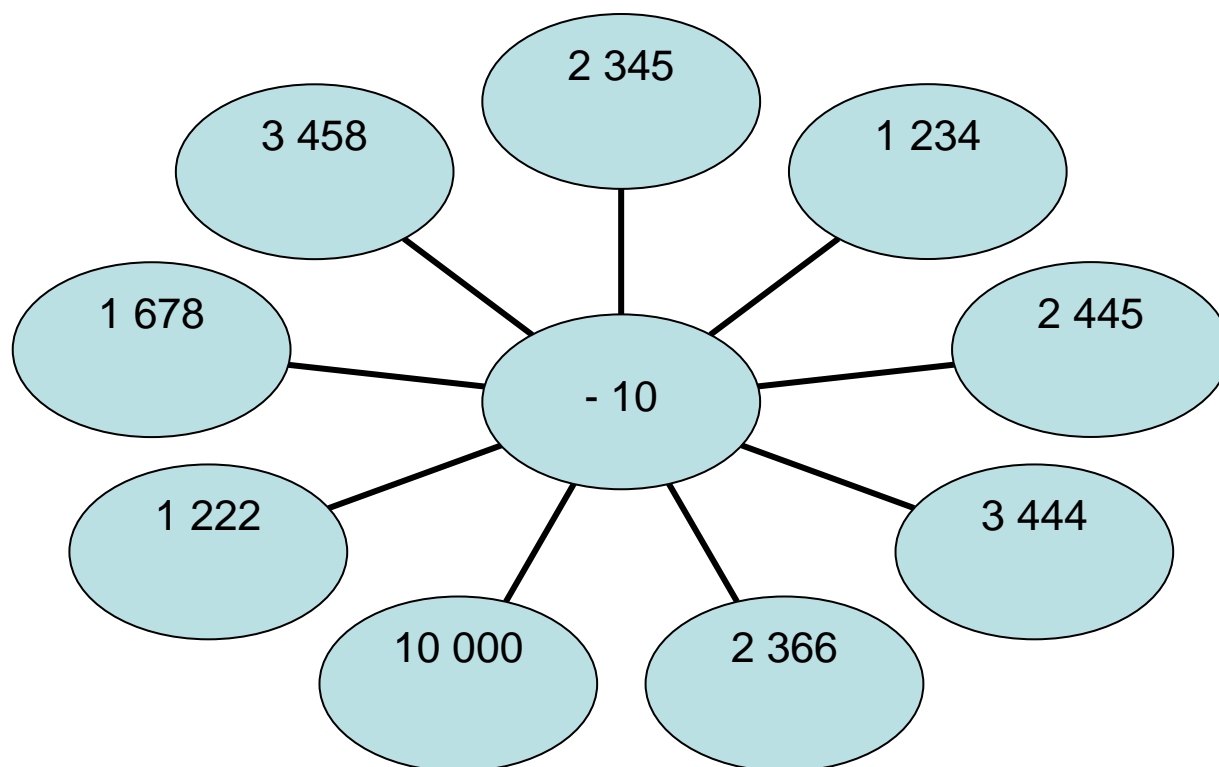


4. U hladnjači se čuva 3 456 kg banana. Jučer je prodano 1 987 kg banana. Koliko banana je ostalo u hladnjači?



1. Zadane brojeve umanji za 10.

B



2. Pisano oduzmi:

$\begin{array}{r} 2\ 844 \\ - 2\ 634 \\ \hline \end{array}$	$\begin{array}{r} 6\ 766 \\ - 3\ 489 \\ \hline \end{array}$	$\begin{array}{r} 3\ 288 \\ - 2\ 255 \\ \hline \end{array}$	$\begin{array}{r} 6\ 189 \\ - 2\ 245 \\ \hline \end{array}$	$\begin{array}{r} 5\ 211 \\ - 1\ 211 \\ \hline \end{array}$	$\begin{array}{r} 2\ 995 \\ - 1\ 299 \\ \hline \end{array}$
---	---	---	---	---	---

$\begin{array}{r} 4\ 857 \\ - 4\ 299 \\ \hline \end{array}$	$\begin{array}{r} 7\ 854 \\ - 1\ 577 \\ \hline \end{array}$	$\begin{array}{r} 9\ 847 \\ - 4\ 345 \\ \hline \end{array}$	$\begin{array}{r} 5\ 588 \\ - 4\ 178 \\ \hline \end{array}$	$\begin{array}{r} 3\ 485 \\ - 1\ 399 \\ \hline \end{array}$	$\begin{array}{r} 4\ 595 \\ - 1\ 249 \\ \hline \end{array}$
---	---	---	---	---	---

$\begin{array}{r} 9\ 687 \\ - 5\ 599 \\ \hline \end{array}$	$\begin{array}{r} 5\ 222 \\ - 5\ 421 \\ \hline \end{array}$	$\begin{array}{r} 5\ 504 \\ - 2\ 141 \\ \hline \end{array}$	$\begin{array}{r} 5\ 444 \\ - 2\ 125 \\ \hline \end{array}$	$\begin{array}{r} 5\ 512 \\ - 5\ 412 \\ \hline \end{array}$	$\begin{array}{r} 4\ 800 \\ - 3\ 114 \\ \hline \end{array}$
---	---	---	---	---	---

$\begin{array}{r} 6\ 822 \\ - 2\ 314 \\ \hline \end{array}$	$\begin{array}{r} 5\ 000 \\ - 2\ 427 \\ \hline \end{array}$	$\begin{array}{r} 4\ 000 \\ - 1\ 234 \\ \hline \end{array}$	$\begin{array}{r} 7\ 000 \\ - 4\ 121 \\ \hline \end{array}$	$\begin{array}{r} 7\ 005 \\ - 8\ 924 \\ \hline \end{array}$	$\begin{array}{r} 7\ 444 \\ - 1\ 111 \\ \hline \end{array}$
---	---	---	---	---	---

BROJEVA 

1. Pisano oduzmi:

B


$$\begin{array}{r} 9\ 207 \\ - 3\ 589 \\ \hline \end{array} \quad \begin{array}{r} 7\ 466 \\ - 5\ 677 \\ \hline \end{array} \quad \begin{array}{r} 8\ 574 \\ - 2\ 188 \\ \hline \end{array} \quad \begin{array}{r} 7\ 490 \\ - 1\ 923 \\ \hline \end{array} \quad \begin{array}{r} 9\ 560 \\ - 5\ 972 \\ \hline \end{array} \quad \begin{array}{r} 8\ 830 \\ - 3\ 891 \\ \hline \end{array}$$

$$\begin{array}{r} 8\ 140 \\ - 4\ 167 \\ \hline \end{array} \quad \begin{array}{r} 5\ 256 \\ - 3\ 478 \\ \hline \end{array} \quad \begin{array}{r} 5\ 577 \\ - 2\ 188 \\ \hline \end{array} \quad \begin{array}{r} 5\ 445 \\ - 2\ 199 \\ \hline \end{array} \quad \begin{array}{r} 5\ 510 \\ - 5\ 434 \\ \hline \end{array} \quad \begin{array}{r} 4\ 055 \\ - 4\ 199 \\ \hline \end{array}$$

2. U akciji skupljanja staroga papira učenici četvrtih razreda skupili su 2 456 kg, a učenici trećih razreda 3 567 kg. Koliko su kg papira učenici trećih razreda skupili više? Koliko su ukupno kg papira skupili učenici trećih i četvrtih razreda?

3. Od zbroja brojeva 5 678 i 1 874 oduzmi njihovu razliku.

4. U jednoj prodavaonici odjeće prije podne je ostvaren promet od 4 567 kn, a poslijepodne od 2 459 kn. Koliki je bio dnevni promet te prodavaonice? Za koliko kn je prijepodnevni promet veći od poslijepodnevna?



5. Od najvećega četveroznamenkastoga broja s različitim znamenkama oduzmi najmanji parni četveroznamenkasti broj, a zatim zbroju dodaj najmanji troznamenkasti broj.

BROJEVA 

1. Pisano oduzmi:

B

$\begin{array}{r} 9\ 275 \\ - 3\ 678 \\ \hline \end{array}$	$\begin{array}{r} 5\ 067 \\ - 3\ 489 \\ \hline \end{array}$	$\begin{array}{r} 4\ 900 \\ - 3\ 224 \\ \hline \end{array}$	$\begin{array}{r} 7\ 000 \\ - 2\ 139 \\ \hline \end{array}$	$\begin{array}{r} 8\ 233 \\ - 2\ 346 \\ \hline \end{array}$	$\begin{array}{r} 8\ 200 \\ - 4\ 922 \\ \hline \end{array}$
$\begin{array}{r} 7\ 333 \\ - 4\ 914 \\ \hline \end{array}$	$\begin{array}{r} 5\ 000 \\ - 4\ 433 \\ \hline \end{array}$	$\begin{array}{r} 4\ 544 \\ - 3\ 934 \\ \hline \end{array}$	$\begin{array}{r} 7\ 200 \\ - 4\ 822 \\ \hline \end{array}$	$\begin{array}{r} 7\ 544 \\ - 3\ 974 \\ \hline \end{array}$	$\begin{array}{r} 5\ 422 \\ - 5\ 996 \\ \hline \end{array}$

2. Od Anine kuće do škole ima 2 345 m. A od Markove kuće do škole 1 567 m. Za koliko m je Markova kuća bliža školi?



3. Koji broj treba dodati broju 3 456 da bi se dobio broj za 1 234 veći od razlike brojeva 10 000 i 3 456?

4. Koji broj treba oduzeti od broja 9 450 da bi se dobio broj za 1 234 veći od zbroja brojeva 1 000 i 3 456?

5. Zbroj prvoga i drugoga pribrojnika je 3 478, a drugoga i trećega pribrojnika 5 679. Izračunaj sva tri pribrojnika ako je njihov zbroj 7 000.